

1)

OALNYIMLPPIIJCSSKIAD




2)

SANHMANYITT


3)

A	B	E	C	E	M	M	O	V	O
L	R	C	A	U	R	U	M	E	T
E	O	I	S	R	I	O	A	E	S
S	N	T	O	S	I	L	G	M	T
I	T	P	S	P	M	Y	E	A	I
K	E	C	I	I	J	E	M	N	K
M	K	A	D	A	S	K	R	Y	N
O	A	N	A	I	K	C	G	N	E
V	T	O	H	O	R	A	C	K	C
A	R	M	H	E	C	H	E	M	O

4)



5)



6)

Bábovka

140 g cukr moučka, 2 balení vanilkového cukru, 120 g másla, 1 lžička kakaa, 400 g polohrubá mouka, 3 plátky citronu, 2 ks vejce, 400 ml mléka

7)

VEJLOBAN
OLBAVYLO

8)



9) doplňte tak, aby byla rovnost pravdivá

$$4 \quad 4 \quad 4 \quad 4 \quad = 20$$

10) doplňte číslo na konec řady

1 2 6 24 ___

3 5 9 17 33 ___

2 4 10 28 ___

14 9 13 8 12 7 11 ___

11)

